





How We Get to School

Cut and sort the different ways to get to school. When you have finished, answer the questions below.

How many people ride a bus to school? _____

Circle which one had the most.

How many people walk to school? _____

Bike Car Bus Walk

How many people ride a bike to school? _____









































Circle which one had the least.

How many people ride in a car to school? _____

Bike Car Bus Walk

How We Get to School

Cut out the following pictures, sort them, and glue them in the correct boxes above!

 twinkl.com	 twinkl.com	 twinkl.com	 twinkl.com	 twinkl.com	 twinkl.com	 twinkl.com	 twinkl.com	 twinkl.com	 twinkl.com
 twinkl.com	 twinkl.com	 twinkl.com	 twinkl.com	 twinkl.com	 twinkl.com	 twinkl.com	 twinkl.com	 twinkl.com	 twinkl.com
 twinkl.com	 twinkl.com	 twinkl.com	 twinkl.com	 twinkl.com	 twinkl.com	 twinkl.com	 twinkl.com	 twinkl.com	 twinkl.com
 twinkl.com	 twinkl.com	 twinkl.com	 twinkl.com	 twinkl.com	 twinkl.com	 twinkl.com	 twinkl.com	 twinkl.com	 twinkl.com